











Name _____

Map Skills: Location on a Grid

Direction: Use the map and key to complete the grid and answer the questions.

5					
4					
3					
2					
1					
	A	B	C	D	E

KEY

tree.....



ice cream...



park bench...



play area...



trash can...



fountain...



bridge...



Name the location of each item on the map:

play area: B4, E2	ice cream:
trash can:	fountain:
park bench:	tree:

Add the following items to the map key by drawing a picture and labeling them.
Draw the items anywhere on the map and name the location.

restroom:	bike trail:
cotton candy:	balloons:

